

5
CLASS



GCS OLYMPIADS
Olympiads of the New Millennium
An ISO 9001:2015 Certified Organization

Duration : 60 Min.
Total Ques. : 50
Paper Type : L 1

GLOBAL SOCIAL SCIENCE OLYMPIAD (GSSO)

Student's Name.....

Enrollment Number :

--	--	--	--	--	--	--	--	--	--	--

-----Signature of Exam Incharge-----

-----Signature of Student's-----

- 1- The Actual Question Paper Contains 50 Questions. Section A Contains 45 Ques. and Section B Contains 5 Ques. (Reasoning & Mental Ability) . Each questions carry an equal marks of 2.
- 2- The Duration of the Test Paper is 60 Minutes
- 3- OMR answer sheets are there for class 3rd to 12th.

Section - A

1. Mountain ranges are chains of mountains. Out of given options which mountain range is the longest in the world?

- (A) Himalayas
- (B) Andes
- (C) Mid ocean-ridge system
- (D) Rocky mountains
- (E) None of these.

2. The longest river is:

- (A) Satluj
- (B) Ganga
- (C) Krishna
- (D) Vyas
- (E) None of these.

3. Dispur is the administrative capital of Assam. Where is its judicial capital:

- (A) Bhagalpur
- (B) Dibrugarh
- (C) Guwahati
- (D) Bikaner
- (E) None of these.

4. Plateaus are _____ topped_____.

- (A) Flat, Places
- (B) Sharp, Mountain
- (C) Ice, Mountain
- (D) Flat, Mountain
- (E) None of these.

5. Andaman and Nicobar is a union territory and its capital is _____:

- (A) Port Blair
- (B) Moradabad
- (C) Fatehpur Sikri
- (D) Patna
- (E) None of these.

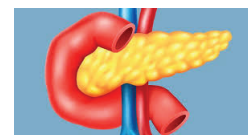
6. Identify a plateau out of given of deserts and plateaus.

- (A) Gibson
- (B) Simpson
- (C) Us Yurt
- (D) Thar
- (E) None of these.

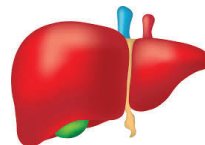
7. Which is the biggest internal organ of the human body:



(A) Heart



(B) Pancreas



(C) Liver



(D) Brain

(E) None of these.

Section - B (Logical Reasoning)

8. **ISI stands for what?**

- (A) Indian Standard Technique
- (B) Internal Security Technique
- (C) Internal Safety Technique
- (D) Indian Standard Time
- (E) None of these.

9. _____ is a hill station in Meghalaya while Mahabaleshwar is hill station in Maharashtra.

- (A) Cherrapunji
- (B) Matheran
- (C) Kalimpong
- (D) Champaulat
- (E) None of these.

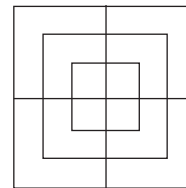
10. Following are given names of some airlines of India. See them carefully to separate that on which has become defund.

- (A) Indian Airlines
- (B) Modiluft
- (C) Air India
- (D) Jet Airways
- (E) None of these.

11. Pointing a man in a photograph Rani said, "He is the brother of my father's brother". How is the man in the photograph related to Rani?

- (A) Son
- (B) Uncle
- (C) Brother
- (D) Father
- (E) None of these

12. Find the minimum number of straight lines used in forming the given figure in each of the questions.



- (A) 10
- (B) 18
- (C) 15
- (D) 14
- (E) None of these